


5 Times Table Maths Mastery Mat

Draw an array to calculate the answer to this calculation.

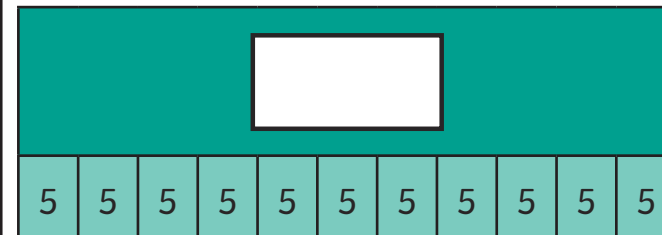
$$4 \times 5 = \boxed{}$$

Write a multiplication sentence to match this image.



$$\boxed{} \times \boxed{} = \boxed{}$$

Complete the bar model.



Fill in the missing boxes.

$$45 \div \boxed{} = 5$$

$$\boxed{} \times 5 = 15$$

$$\boxed{} = 12 \times 5$$

Solve this problem.

Felix only has 5p coins in his money box.

He has 35p altogether.

How many 5p coins are there in his money box?

$$\boxed{}$$

Complete the number sequences.

25		35	40		
----	--	----	----	--	--

	20	15			
--	----	----	--	--	--

5 Times Table Maths Mastery Mat

Complete the calculations.

$$5 \times \square = 35$$

$$35 = \square \times 7$$

$$\square = 7 \times 5$$


True or false?



All multiples of 5 are multiples of 10.

Explain your answer.

Circle the calculations that are represented by this array.




$5 \times 7 = 35$

$40 \div 5 = 8$

$6 \times 5 = 30$

$7 = 35 \div 5$

If 1 strawberry weighs 12g, what is the weight of 5 strawberries?



g

Solve this problem.

It takes 5 hours for Dad to travel to and from work every day.

If Dad works Monday to Friday. How many hours does he spend travelling altogether?

hours

Guess my number.

My number is a 2-digit number.

It is multiple of 5 but not a multiple of 10.

It has an odd tens digit.


The digit total is less than 10.

What is my number?

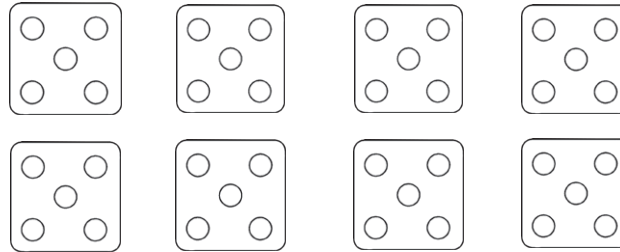
5 Times Table Maths Mastery Mat **Answers**

Draw an array to calculate the answer to this calculation.

$$4 \times 5 = \boxed{20}$$




Write a multiplication sentence to match this image.



$$\boxed{8} \times \boxed{5} = \boxed{40}$$

or $\boxed{5} \times \boxed{8} = \boxed{40}$

Complete the bar model.



Fill in the missing boxes.

$$45 \div \boxed{9} = 5$$

$$\boxed{3} \times 5 = 15$$

$$\boxed{60} = 12 \times 5$$

Solve this problem.


Felix only has 5p coins in his money box.

He has 35p altogether.

How many 5p coins are there in his money box?

7

Complete the number sequences.



5 Times Table Maths Mastery Mat **Answers**

Complete the calculations.

$$5 \times \boxed{7} = 35$$

$$35 = \boxed{5} \times 7$$

$$\boxed{35} = 7 \times 5$$

True or false?




All multiples of 5 are multiples of 10.

Explain your answer.

False. Multiples of 5 have either 5 ones or 0 ones. Multiples of 10 only have 0 ones. So some multiples of 5 are multiples of 10 but not all of them.

Circle the calculations that are represented by this array.




$5 \times 7 = 35$

$40 \div 5 = 8$

$6 \times 5 = 30$

$7 = 35 \div 5$

If 1 strawberry weighs 12g, what is the weight of 5 strawberries?



60 g

Solve this problem.

It takes 5 hours for Dad to travel to and from work every day.

If Dad works Monday to Friday. How many hours does he spend travelling altogether?

25 hours

Guess my number.

My number is a 2-digit number.

It is multiple of 5 but not a multiple of 10.

It has an odd tens digit.

The digit total is less than 10.

What is my number?

15 or 35